

# Fylltu inn í töflurnar

11	12	13	14	15	16	17	18	19	20
----	----	----	----	----	----	----	----	----	----

1.  
Notaðu blyánt

1	2	3	4		6	7		9	
---	---	---	---	--	---	---	--	---	--

a)

b)

c)




2.

11	12		14	15			18	19	20
----	----	--	----	----	--	--	----	----	----

a)

b)

c)



GEMS-S00195A

GEMS Lykilnúmer \_\_\_\_\_


Dagsetning \_\_\_\_\_

Bekkur \_\_\_\_\_

Kennari \_\_\_\_\_


Skóli \_\_\_\_\_

# 3. Teldu og skrifaðu




15


a)



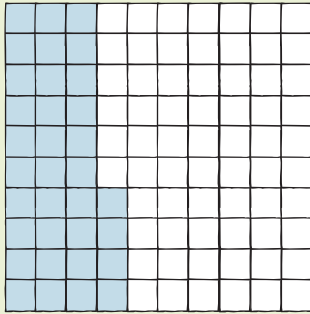

b)




c)

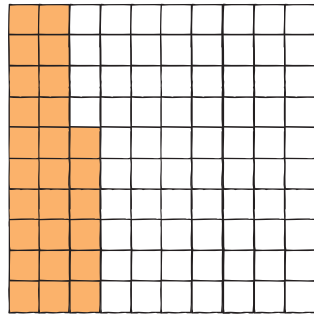



# 4. Teldu lituđu kassana

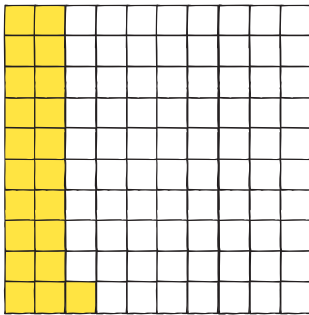


34

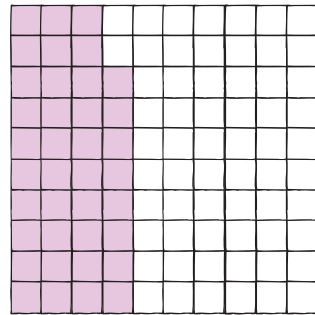
a)



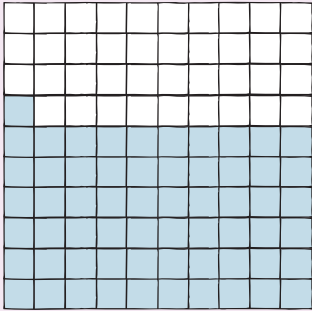
b)



c)




# 5. Litaðu réttan fjölda af kössum




61


a)



40




b)



75

c)



89